



EMU





SPACE

WORD SEARCH

D	W	R	D	U	S	T	J	T	V	R	M	U
L	A	U	N	C	H	K	F	A	A	Z	A	C
K	V	W	W	Z	J	P	L	T	X	Y	A	O
Z	A	A	N	R	S	B	S	A	U	S	V	M
A	C	S	L	L	O	Q	C	R	P	H	M	E
W	O	K	R	C	R	C	R	C	M	W	O	T
G	R	D	O	R	M	O	K	H	L	J	O	M
R	B	F	C	M	E	M	O	E	I	A	N	H
M	I	D	K	R	J	D	D	X	T	T	N	V
P	T	A	S	T	R	O	N	A	U	T	I	V
P	O	P	P	Y	H	S	H	U	T	T	L	E

LAUNCH

SHUTTLE

STAR

ROCKS

ORBIT

ROCKET


MOON

ASTRONAUT

COMET

DUST

Echo Drawing



Hints:

 Mark the middle

 Look for familiar lines and shapes

 Trace with your finger

 Use "hand memory"

Addition

Round 1

1. $1 + 3 =$
2. $3 + 3 =$
3. $6 + 1 =$
4. $3 + 8 =$
5. $2 + 5 =$
6. $8 + 1 =$
7. $2 + 5 =$
8. $2 + 1 =$
9. $5 + 2 =$
10. $7 + 2 =$
11. $1 + 2 =$
12. $4 + 9 =$
13. $4 + 8 =$
14. $8 + 6 =$
15. $1 + 7 =$
16. $6 + 9 =$
17. $9 + 4 =$
18. $9 + 6 =$
19. $5 + 7 =$
20. $7 + 4 =$

Time: _____

Errors: _____

Round 2

1. $4 + 9 =$
2. $9 + 4 =$
3. $5 + 1 =$
4. $6 + 4 =$
5. $8 + 1 =$
6. $2 + 5 =$
7. $8 + 7 =$
8. $9 + 9 =$
9. $6 + 5 =$
10. $3 + 6 =$
11. $1 + 4 =$
12. $8 + 2 =$
13. $2 + 3 =$
14. $5 + 8 =$
15. $4 + 8 =$
16. $4 + 8 =$
17. $1 + 2 =$
18. $3 + 7 =$
19. $7 + 3 =$
20. $7 + 6 =$

Time: _____

Errors: _____

Round 3


1. $9 + 4 =$
2. $6 + 5 =$
3. $8 + 6 =$
4. $7 + 3 =$
5. $4 + 2 =$
6. $6 + 1 =$
7. $6 + 7 =$
8. $8 + 8 =$
9. $1 + 9 =$
10. $5 + 6 =$
11. $4 + 5 =$
12. $7 + 2 =$
13. $9 + 3 =$
14. $6 + 6 =$
15. $3 + 4 =$
16. $5 + 9 =$
17. $8 + 9 =$
18. $7 + 8 =$
19. $9 + 7 =$
20. $5 + 5 =$

Time: _____

Errors: _____

Common Exception Words


d o o r d f l o o r y s
h w f r b e h i n d w z
p z i s c d z f g h c j
o l n n o p q r s t h v
o x d m z z c w z f i h
r j k i n d o i q r l t
e v w n s z a l j d d f
g j i d k z m d o p r z
c l i m b x y z a b e d
z f g h c h i l d n n p
q r t z d j y x z z a b
b e c a u s e j k z m n



door
floor
poor
because

find
kind
mind
behind

child
children
wild
climb



Name _____

Date _____

Missing Numbers 1 - 120 (1)

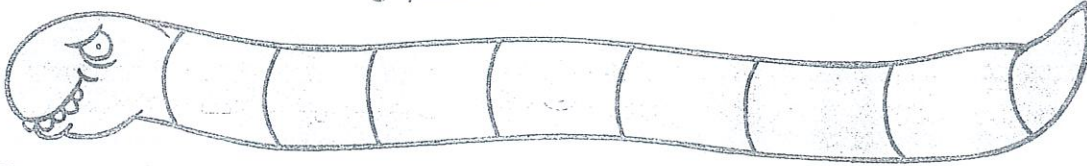
Fill in the missing numbers.

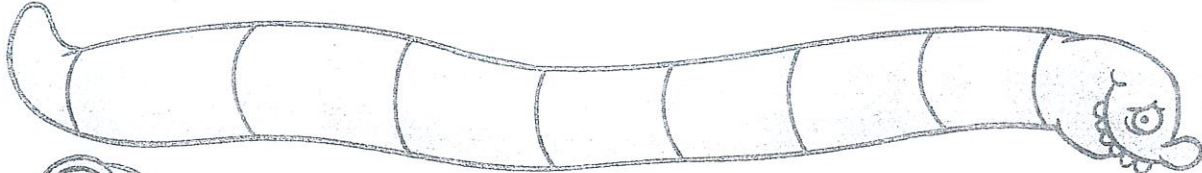
1	2		4	5	6	7	8		10
	12		14	15	16		18	19	20
21		23	24	25		27	28	29	
31		33	34	35		37		39	40
	42	43	44		46	47		49	
51		53	54	55		57	58		60
61		63	64		66	67		69	70
71	72	73			76	77		79	80
	82	83		85		87	88		90
91		93	94	95	96		98	99	
	102	103	104		106	107		109	110
111		113	114		116		118		120




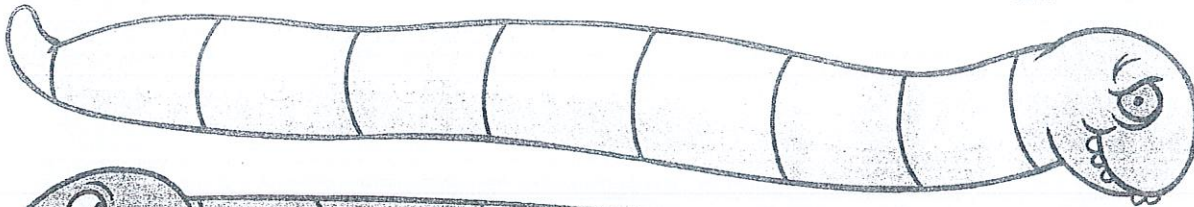
Counting in 2s, 3s and 5s

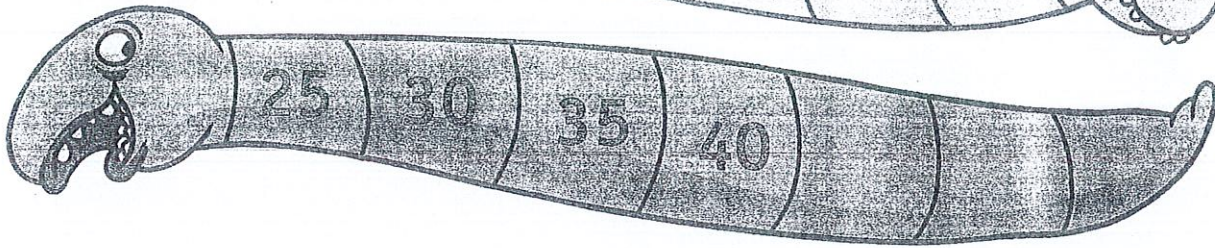
1 Continue each counting pattern.

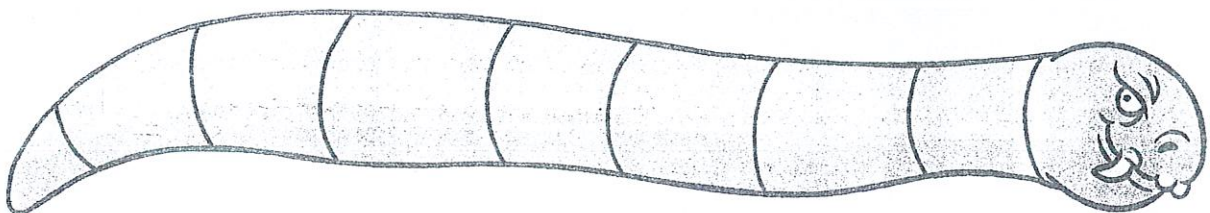




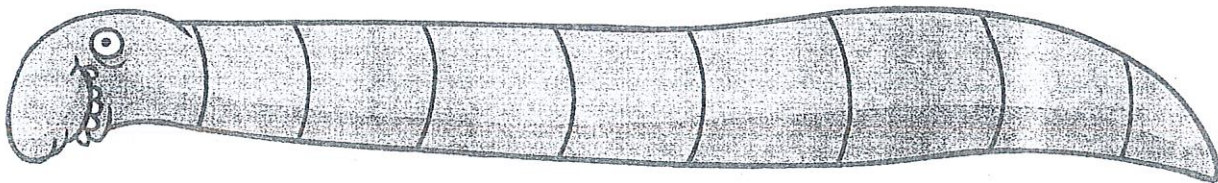








2 Make your own pattern.





Looking for patterns

Describe each pattern.

Write , or in the box.

Common Exception Words

b b b d e f a t h e r l
e p a t h r s t c v w x
a z t b c d e f l p i j
u l h n o p q r a a u v
t x y z a g r a s s g h
i j k l m n o p s s s t
f v w x l z a b c d e f
u h i p a s t n o p q r
l t u v s x y z a l c d
e f a s t j k l m a o p
q r s t u v w x y n a b
a f t e r h i j k t m n

beautiful
after
fast
last

past
father
class
grass

pass
plant
path
bath



Healthy Foods Word Search



APPLE

BANANA

BEANS

BLUEBERRIES

BROCCOLI

CAPSICUM

CARROT

CAULIFLOWER

LETTUCE

MANGO

ORANGE

PASSIONFRUIT

PEACH

PEAR

PUMPKIN


RASPBERRIES

STRAWBERRY

TOMATO

WATERMELON

ZUCCHINI




Name: _____

Date: _____





Symmetry Drawing - Cat


Use the grid to draw the other side of the cat. Colour it in when you have finished.




Echo Drawing

Hints:

-  Mark the middle
-  Look for familiar lines and shapes
-  Trace with your finger
-  Use "hand memory"




Place value




2 hundreds 4 tens 3 ones

$$200 + 40 + \square = \square$$




___ hundreds ___ tens ___ ones

$$\square + \square + \square = \square$$




___ hundreds ___ tens ___ ones

$$\square + \square + \square = \square$$



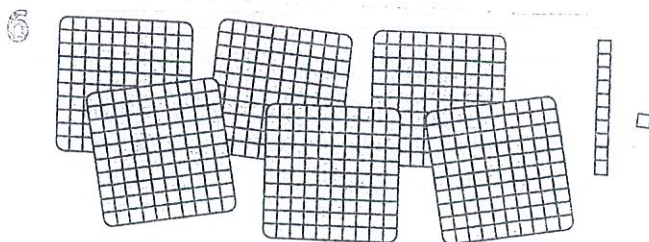
___ hundreds ___ tens ___ ones

$$\square + \square + \square = \square$$



___ hundreds ___ tens ___ ones

$$\square + \square + \square = \square$$



___ hundreds ___ tens ___ ones

$$\square + \square + \square = \square$$

7 $300 + 90 + 1 = \square$

$900 + 0 + 9 = \square$

$700 + 20 + 0 = \square$

$800 + 40 + 1 = \square$

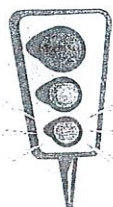
Challenge: Colour the number with:


- 6 hundreds red
- 2 tens and 7 ones blue
- 3 hundreds and 1 ten green

594

827

319





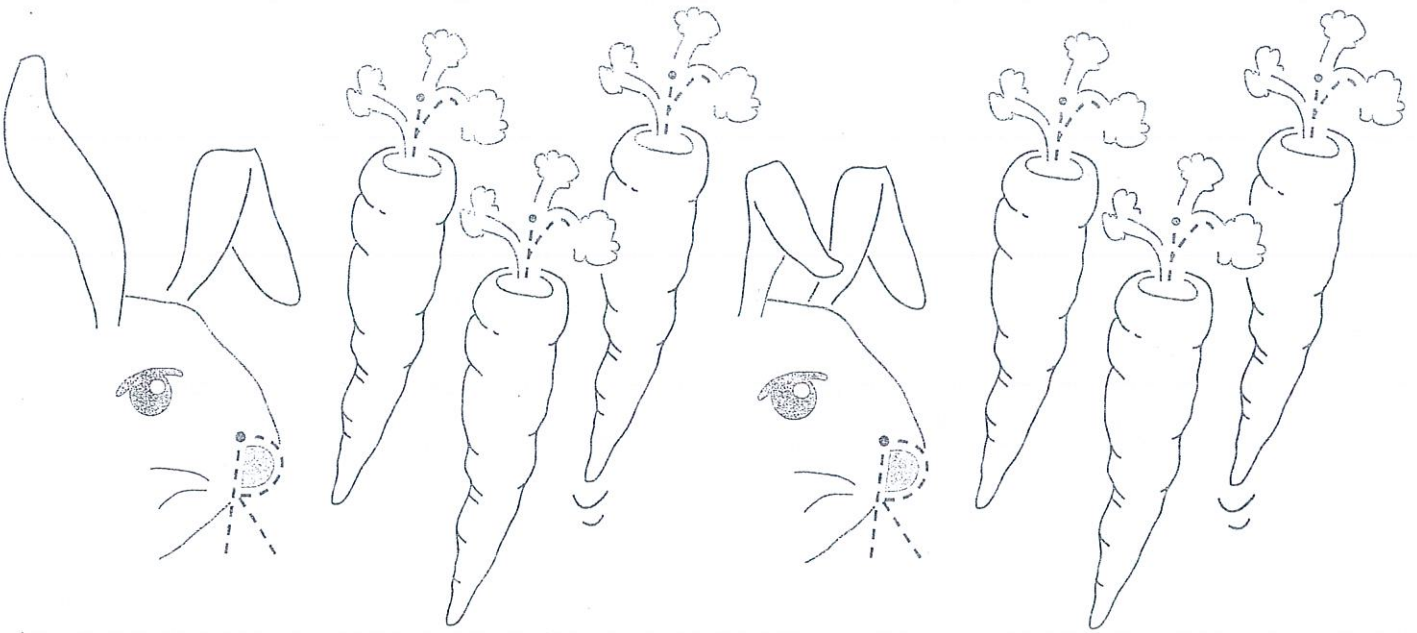
body



R r R r R r

R R R r r r

R r R r R r

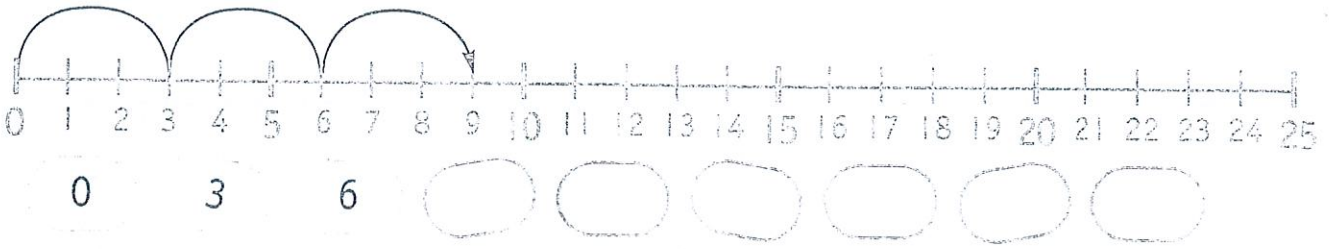


Rory Rabbit crunched

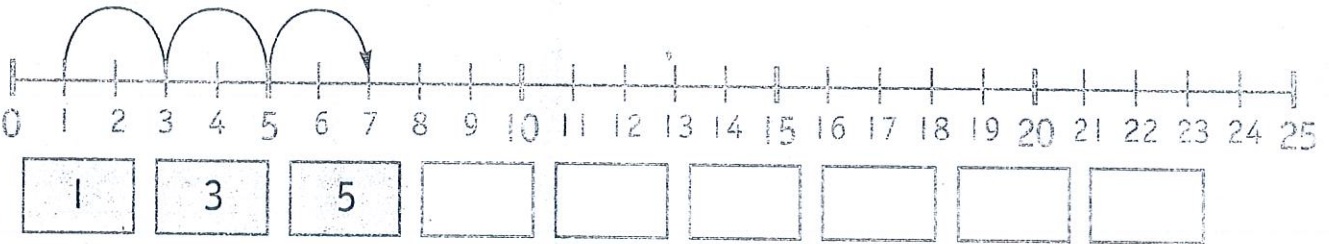
three orange carrots.

Patterns on the number line

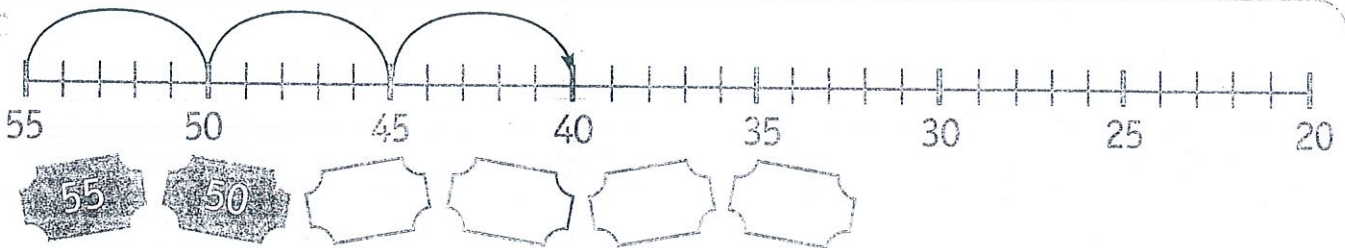
Make equal jumps along the number line.
Write the numbers you land on.



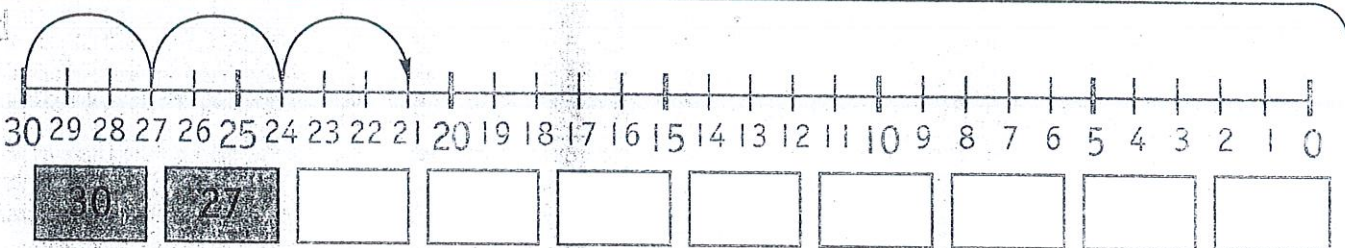
The rule is _____.



The rule is _____.



The rule is _____.



The rule is _____.



Looking for patterns Keep counting by 5.



When I count in fives from zero, the numbers end in ____ or ____.

*mindfulness
colouring*



Name: _____

Date: _____

Connecting Compound Words

Find and write the compound words in the spaces below.

straw	spot	fish	chair	note
tooth	wheel	book	light	box
pot	mail	salt	berry	rain
room	tea	star	ball	bed
pick	water	basket	bow	

1. _____

7. _____

2. _____

8. _____

3. _____

9. _____

4. _____

10. _____

5. _____

11. _____


6. _____

12. _____

Subtraction to twenty.

Finish in your own colours.


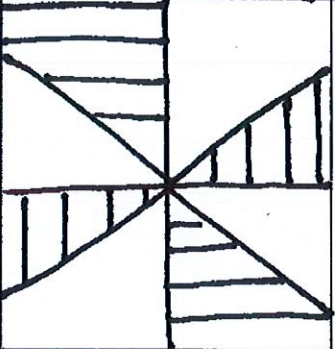

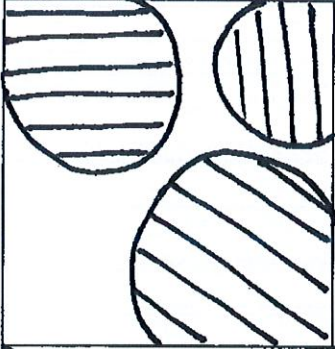
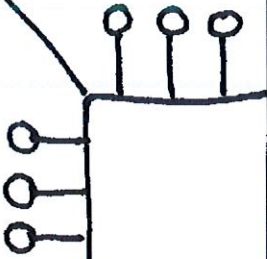



17 fat mice.
4 ran away.
How many were left?



Look for the numbers more than once and colour the picture.

<p>blue</p> $\begin{array}{r} 14 \\ - 4 \\ \hline \end{array}$	<p>green</p> $\begin{array}{r} 13 \\ - 2 \\ \hline \end{array}$	<p>red</p> $\begin{array}{r} 8 \\ - 2 \\ \hline \end{array}$	<p>yellow</p> $\begin{array}{r} 19 \\ - 12 \\ \hline \end{array}$	<p>purple</p> $\begin{array}{r} 9 \\ - 1 \\ \hline \end{array}$
<p>pink</p> $\begin{array}{r} 19 \\ - 10 \\ \hline \end{array}$	<p>orange</p> $\begin{array}{r} 17 \\ - 3 \\ \hline \end{array}$	<p>black</p> $\begin{array}{r} 19 \\ - 3 \\ \hline \end{array}$	<p>brown</p> $\begin{array}{r} 18 \\ - 6 \\ \hline \end{array}$	<p>rainbow</p> $\begin{array}{r} 19 \\ - 4 \\ \hline \end{array}$
<p>red</p> $\begin{array}{r} 18 \\ - 0 \\ \hline \end{array}$	<p>yellow</p> $\begin{array}{r} 17 \\ - 4 \\ \hline \end{array}$	<p>blue</p> $\begin{array}{r} 4 \\ - 0 \\ \hline \end{array}$	<p>green</p> $\begin{array}{r} 18 \\ - 18 \\ \hline \end{array}$	<p>white</p> $\begin{array}{r} 5 \\ - 3 \\ \hline \end{array}$

Echo Drawing

Hints:


 Mark the middle

 Look for familiar lines and shapes

 Trace with your finger

 Use "hand memory"

MINDFULNESS COLOURING




Subtraction to one hundred.

Finish in your own colours.

WRITE THE SUM


38 red apples.
13 had worms.
How many were left?



Look for the numbers more than once and colour the picture.

<p>blue</p> $\begin{array}{r} 66 \\ - 52 \\ \hline \end{array}$	<p>green</p> $\begin{array}{r} 59 \\ - 51 \\ \hline \end{array}$	<p>red</p> $\begin{array}{r} 48 \\ - 7 \\ \hline \end{array}$	<p>yellow</p> $\begin{array}{r} 44 \\ - 33 \\ \hline \end{array}$	<p>purple</p> $\begin{array}{r} 79 \\ - 49 \\ \hline \end{array}$
<p>pink</p> $\begin{array}{r} 47 \\ - 26 \\ \hline \end{array}$	<p>orange</p> $\begin{array}{r} 94 \\ - 61 \\ \hline \end{array}$	<p>black</p> $\begin{array}{r} 68 \\ - 56 \\ \hline \end{array}$	<p>brown</p> $\begin{array}{r} 25 \\ - 25 \\ \hline \end{array}$	<p>rainbow</p> $\begin{array}{r} 66 \\ - 42 \\ \hline \end{array}$
<p>red</p> $\begin{array}{r} 98 \\ - 85 \\ \hline \end{array}$	<p>yellow</p> $\begin{array}{r} 29 \\ - 7 \\ \hline \end{array}$	<p>blue</p> $\begin{array}{r} 58 \\ - 26 \\ \hline \end{array}$	<p>green</p> $\begin{array}{r} 98 \\ - 75 \\ \hline \end{array}$	<p>white</p> $\begin{array}{r} 45 \\ - 14 \\ \hline \end{array}$

Mindfulness Colouring



HOT WHEELS™

**Super
Speed!**



DOLPHIN



ECHIDNA

